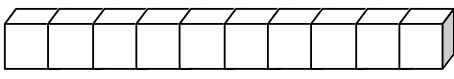
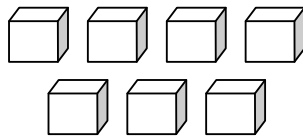


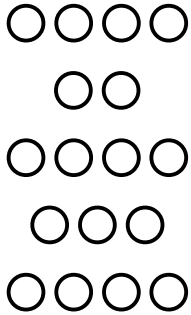
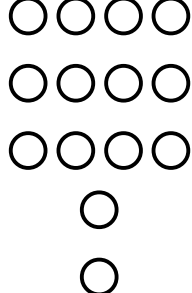



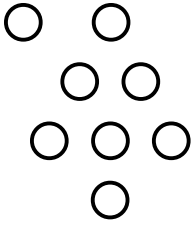

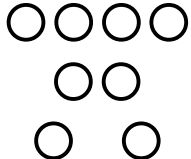
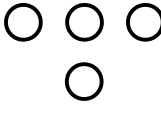

	Les nombres de 0 à 17	
---	-----------------------	--

17	dix-sept	 
----	----------	--

1. Dénombre.


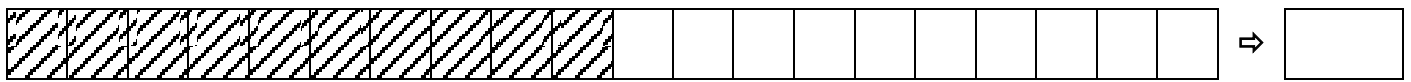
2. Complète.

				
15	10	16	14	17

3. Complète.

1			4		6				10			13		15		
---	--	--	---	--	---	--	--	--	----	--	--	----	--	----	--	--

4. Indique le nombre de cases colorées.



5. Calcule.

$10 + 2 = \underline{\quad}$

$10 + 8 = \underline{\quad}$

$10 + 1 = \underline{\quad}$

$10 + 5 = \underline{\quad}$

$10 + 6 = \underline{\quad}$

$10 + 0 = \underline{\quad}$

$10 + 3 = \underline{\quad}$

$10 + 9 = \underline{\quad}$

$10 + 7 = \underline{\quad}$

6. Place les signes $>$ ou $<$.

$12 \underline{\quad} 10$

$10 \underline{\quad} 15$

$11 \underline{\quad} 14$

$14 \underline{\quad} 17$

$17 \underline{\quad} 16$

$13 \underline{\quad} 12$

$11 \underline{\quad} 10$

$11 \underline{\quad} 16$

$15 \underline{\quad} 11$

$10 \underline{\quad} 10$

$17 \underline{\quad} 15$

$15 \underline{\quad} 14$

7. Ecris en lettres.

$10 \Rightarrow \underline{\hspace{2cm}}$

$11 \Rightarrow \underline{\hspace{2cm}}$

$13 \Rightarrow \underline{\hspace{2cm}}$

$17 \Rightarrow \underline{\hspace{2cm}}$

$14 \Rightarrow \underline{\hspace{2cm}}$

$16 \Rightarrow \underline{\hspace{2cm}}$

$15 \Rightarrow \underline{\hspace{2cm}}$

$12 \Rightarrow \underline{\hspace{2cm}}$