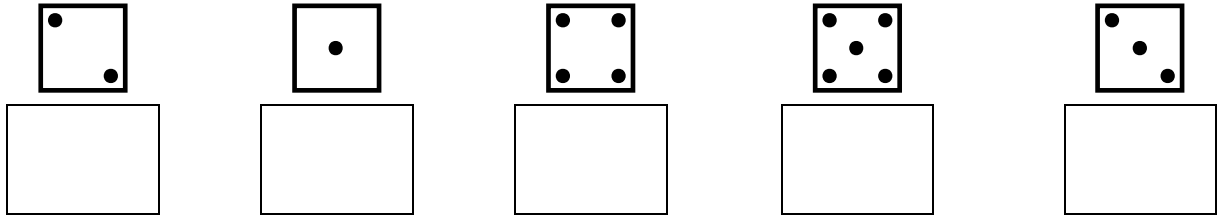




# Evaluation : les nombres

# 0 à 5


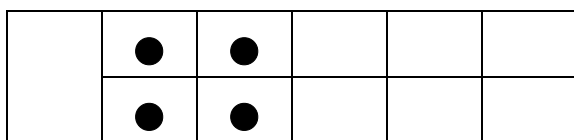
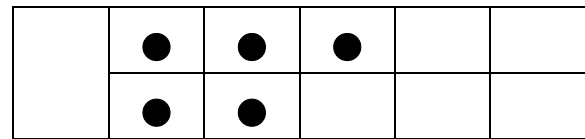
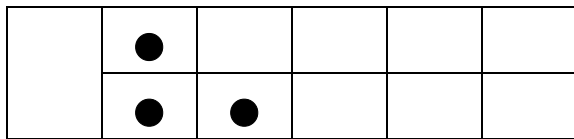
1. Ecris le nombre correspondant à chaque face du dé.



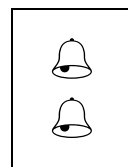
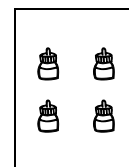

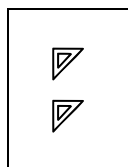
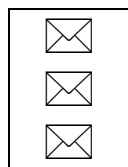

2. Dessine le nombre d'objet indiqué.



3. Compte les objets.



4. Relie chaque collection au nombre d'objets.



<b>1</b>
----------

<b>2</b>
----------

<b>3</b>
----------

<b>4</b>
----------

<b>5</b>
----------