






## Mathématiques

## Les nombres de 0 à 5

1. Colorier le nombre d'objets présents dans chaque collection.



1 2 3

3 4 5

2 5 3

0 4 1

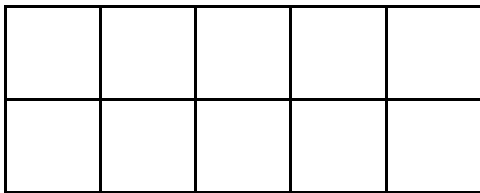
5 3 4

2. Ecrire le nombre.

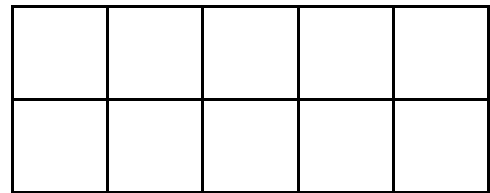


3. Dessiner les jetons dans chaque casier.

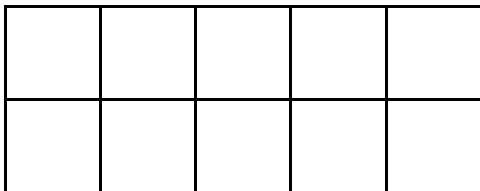
3



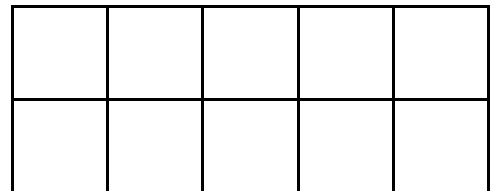
4





2



5



4. Relier chaque collection au nombre.



1

2

3

4

5

